




Solve each problem.


Answers

- 1) Which letter best shows -105?




1. _____

- 2) Which letter best shows -22?




2. _____

- 3) Which letter best shows -115?



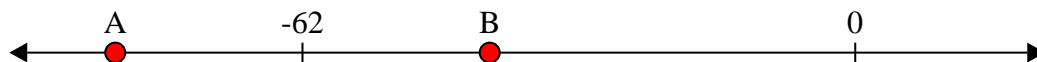
3. _____

- 4) Which letter best shows -33?




4. _____

- 5) Which letter best shows -41?




5. _____

- 6) Which letter best shows -20?




6. _____

- 7) Which letter best shows -56?




7. _____

- 8) Which letter best shows -118?



8. _____

- 9) Which letter best shows -26?



9. _____

- 10) Which letter best shows -116?




10. _____




Solve each problem.


- 1) Which letter best shows -105?




- 2) Which letter best shows -22?



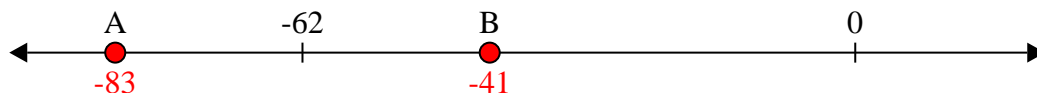
- 3) Which letter best shows -115?




- 4) Which letter best shows -33?



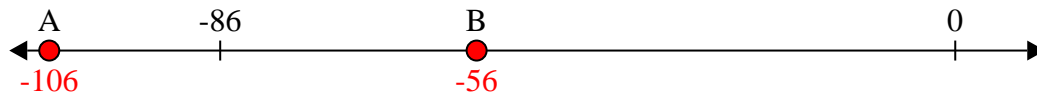
- 5) Which letter best shows -41?



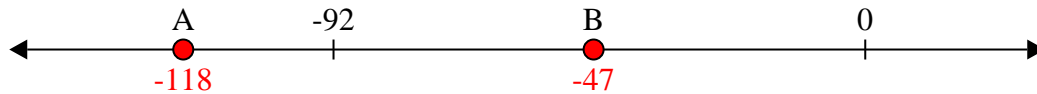
- 6) Which letter best shows -20?




- 7) Which letter best shows -56?



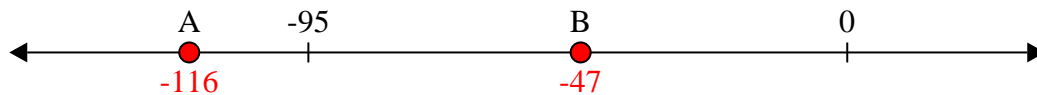
- 8) Which letter best shows -118?



- 9) Which letter best shows -26?



- 10) Which letter best shows -116?

**Answers**

1. **A**
2. **B**
3. **A**
4. **B**
5. **B**
6. **B**
7. **B**
8. **A**
9. **B**
10. **A**